

Graphing Review

Save this for the entire year!

Introduction

Line graphs compare two variables. Each variable is plotted along an axis. A line graph has a vertical axis and a horizontal axis. For example, if you wanted to graph the height of a ball after you have thrown it, you would put time along the horizontal, or x-axis, and height along the vertical, or y-axis.

Line graphs are important in science for several reasons such as:

- showing specific values of data. If one variable is known, the other can be determined.
- showing trends and relationships in data clearly. They visibly depict how one variable is affected by the other as it increases or decreases.
- allowing the viewer to make predictions within recorded data, called **interpolation**, and to make predictions about data not yet recorded, called **extrapolation**.

Interpolation vs. Extrapolation

Determine which of the examples below is interpolation and which is extrapolation. Explain why.

1. The value of Sarah's car in 2004 was \$17,500. _____
2. The value of Sarah's car in 2008 was \$1,900. _____

How to Construct a Line Graph:

1. Identify the Variables & Label the Axes
 - a. **Independent Variable** – factor that is varied in an experiment and specifically controlled by the experimenter
 - i. Label along the x-axis (horizontal) – include units
 - ii. Typically found on the left side of a data table
 - b. **Dependent Variable** – factor that is measured in an experiment and will change as a result of the independent variable
 - i. Label along the y-axis (vertical) – include units
 - ii. Typically found on the right side of a data table

Independent vs. Dependent Variable Practice

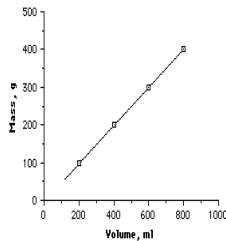
- A student wanted to observe how changing the temperature of the aquarium water would affect the breathing rate of his goldfish.
 - What is the independent variable? _____
 - What is the dependent variable? _____
- A student wanted to determine how tall corn would grow if different types of fertilizer were used.
 - What is the independent variable? _____
 - What is the dependent variable? _____

2. Determine the Graph Scale
 - a. Determine the magnitude (numeric value) of each variable
 - b. Establish a scale that best fits the range of each variable
 - c. Spread the graph to use the MOST available space (use at least $\frac{3}{4}$ of the graph)
 - d. Be consistent throughout each axes' scale
3. Plot the data points
 - a. Plot each data value on the graph with a dot
 - b. If multiple sets of data are being plotted, use different colored lines and include a key

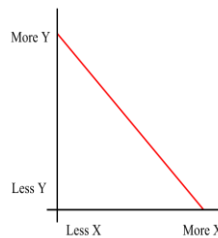
4. Draw the Graph

- a. DO NOT connect the dots unless specifically told to do so
- b. Draw one of the following types of graphs:

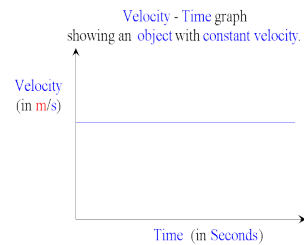
i. Best fit Straight Line



DIRECT RELATIONSHIP
-Both variables increase together

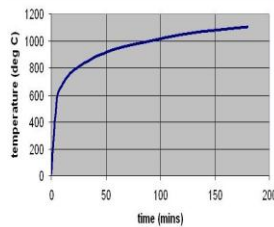
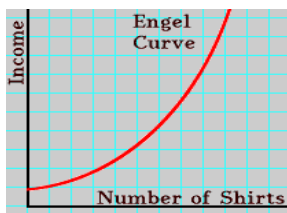


INDIRECT RELATIONSHIP
-As one variable increases, the other decreases

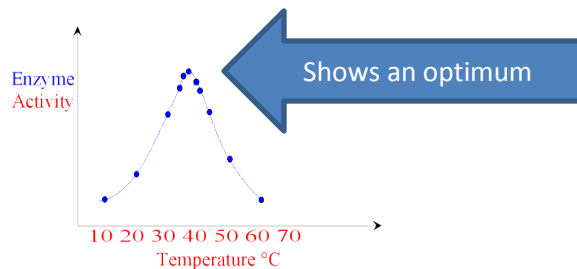


CONSTANT RELATIONSHIP
-Change in one variable has no effect on the other

ii. Best fit Curved Line



iii. Best fit Peak Line



5. Title the Graph

- a. Titles are used to clearly portray what the graph is about so be specific.
- b. Titles are typically written as "Y-axis variable" vs. "X-axis variable" and are written at the top of the graph.

Example: Think back to the goldfish experiment . The appropriate title for that graph would be The Breathing Rate of Goldfish vs. The Temperature of Water.

Graphing Practice

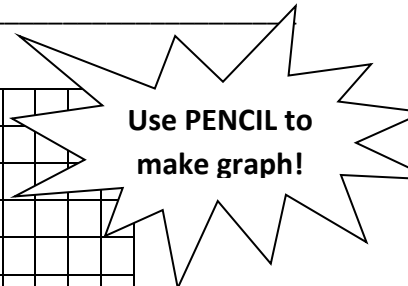

Practice Problem #1

Background: The thickness of the annual rings indicates what type of environmental situation was occurring the time of the tree's development. A thin ring usually indicates a rough period of development such as lack of water, forest fires, or insect infestation. On the other hand, a thick ring means a prosperous period of development. Use the information from the data table below to create a proper scientific graph and to answer the corresponding questions.

Age of Trees (in years)	Average Thickness of Annual Rings in Forest A (millimeters)	Average Thickness of Annual Rings in Forest B (millimeters)
10	20	24
20	24	28
30	30	35
35	34	38
50	41	45
60	46	51

1. What is the dependent variable? _____
2. What is the independent variable? _____
3. What was the average thickness of annual rings for 40 year old trees in Forest A? _____
4. What is it called when you make predictions within given data, such as made in question #3? _____
5. What was the mean thickness of annual rings for all trees found in Forest B? _____
6. Based on the data shown, what can be concluded about the comparative health of Forest A & B? _____

7. What type of relationship (constant, direct, or indirect) exists between the age of trees and the average thickness of the tree's rings? Explain. _____





Practice Problem #2

Background: Clams were placed into various temperatures of water. Use the information in the data table below in order to create a proper scientific graph and to answer the corresponding questions.

Water Temperature (°C)	Number of Developing Clams
15	72
20	92
25	120
30	140
35	99
40	72
45	36
50	0

1. What is the dependent variable? _____
2. What is the independent variable? _____
3. What is the optimum temperature for clam development? _____
4. What is the mean number of clams per sample? _____
5. Approximately how many clams would be developing in 10 degree Celsius water? _____
6. What is it called when you make predictions about data not yet recorded, such as the prediction we made in question number 5? _____


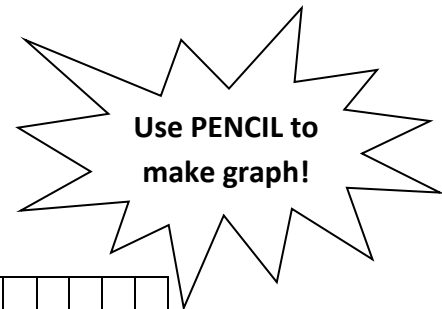


Practice Problem #3

Background: Natalie sets out to run 15 kilometers. Every 30 minutes she checked her pedometer to determine how far she had run. Use the data below to create a proper scientific graph and to answer the corresponding questions.

Time (minutes)	Total Distance (km)
0	0
30	6.8
60	10.1
90	12
120	13.3
150	15

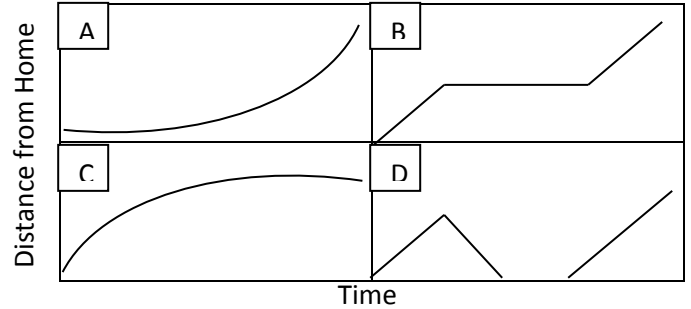
1. What is the dependent variable? _____
2. What is the independent variable? _____
3. How many kilometers had Natalie run after 40 minutes? _____
4. What was Natalie’s average speed (in kilometers per hour) over the course of her run? _____
Use the formula $Speed = Distance / Time$



Practice #4

Background: Match each story on the left with the graph it represents on the right. Each graph compares the distance a car is from home compared to time.

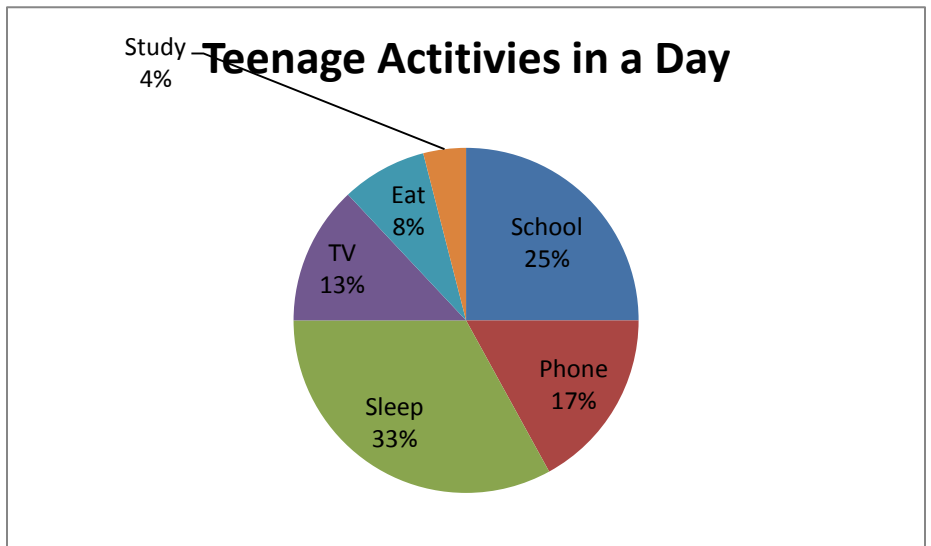
- ____ 1. I had just left home when I realized I had forgotten my books, so I went back to pick them up.
- ____ 2. The battery on my electric car started to run down.
- ____ 3. Things went fine until I had a flat tire.
- ____ 4. I started out calmly, but sped up when I realized I was going to be late.



Practice Problem #5

Background: The pie chart shows the approximate percentages teenagers spend doing various activities in a day. Use the information in the pie chart to answer the questions below.

- 1. What percent of the day is spent watching TV? _____
- 2. How many hours are spent sleeping? _____
- 3. What activity takes up the least amount of time? _____
- 4. What activity takes up a quarter of the day? _____
- 5. What two activities take up 50% of the day? _____
- 6. What two activities take up 25% of the day? _____



Practice Problem #6

- 1. What is the dependent variable? _____
- 2. Does the price per bushel always increase with demand? _____
- 3. What is the quantity demanded when the price is \$5 per bushel? _____
- 4. What is the price per bushel when the quantity demanded is 80? _____

